

☆ ☆ ☆ ——— ☆ ☆ ☆
Name: _____

First Grade Homework Packet- Spring Break



Due: Wednesday, April 19th

Please check off when completed:

- I did ALL of my worksheets
- I counted by 1s to 100 aloud
- I counted by 5s and 10s to 100
aloud
- I practiced my sight words
- I read my books every day

Email your teacher for any questions!

Have a great vacation!



☆ ☆ ☆ ——— ☆ ☆ ☆

Nombre: _____

Paquete de Tarea del Primer Curso- Receso de Abril



Fecha de entrega:
Miercoles 19 de Abril

Por favor revise si termino lo
siguiente:

- Hice TODAS las hojas.
- Conte del 1 al 100 en voz alta.
- Conte por 5 y 10 hasta 100.
- Practique mis palabras frecuentes.
- Lei mis libros todos los dias.
-

Enviele un correo eletronico a su
maestra con cualquier pregunta que
surja!!

Disfruta de tus vacaciones!



Read, Rhyme, and Draw

Read each sentence and circle the words that rhyme. Then draw a picture to go with each sentence.

I buried my hand in the sand.

The clown wore a crown when he came to town.

The Long i Sound

Say the name of each picture.

Unscramble the letters in the box and write the word on the line.



idrbe




imec



elmis



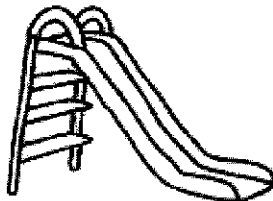
keib



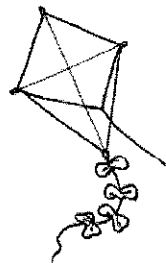
cdei



vieh



dlise



ekti



United States Mint image

eidm

Name _____

Date _____

Word Scramble: Grade One (Grade 1) Vocabulary List Three

Unscramble the following words:

- 1) sun _____
- 2) nur _____
- 3) nuf _____
- 4) nbu _____
- 5) rtfon _____
- 6) htngi _____
- 7) eeht _____
- 8) eryev _____
- 9) oto _____
- 10) by _____
- 11) onit _____
- 12) aonlg _____
- 13) isx _____
- 14) one _____
- 15) ruof _____

Powered by: The Online Teacher Resource (www.teach-nology.com)

© TeAch-nology, Inc., All rights reserved.

WEEKLY HOMEWORK

Monday

READING

Camp Out

Stan went camping with his mom, dad, and sister.
They went to a state park.
First, they pitched a tent.
Then, they roasted marshmallows.
Stan's dad read them a story.
Stan's mom sang songs.
Everyone laughed and had fun.
Finally, it was time for bed.
Stan had a great time camping with his family.

1. What is the main idea?

- a) Stan's mom sang songs.
- b) They had marshmallows.
- c) Stan's family went camping.

2) What is this passage?

- a) a FICTION story
- b) a poem
- c) a NONFICTION story

MATH

$35 = \underline{\quad} \text{ tens } \underline{\quad} \text{ ones}$

$26 = \underline{\quad} \text{ tens } \underline{\quad} \text{ ones}$

$17 = \underline{\quad} \text{ tens } \underline{\quad} \text{ ones}$

$8 \text{ tens} + 2 \text{ ones} = \underline{\quad}$

$3 \text{ tens} + 7 \text{ ones} = \underline{\quad}$

$9 \text{ tens} + 9 \text{ ones} = \underline{\quad}$

$78 = \underline{\quad} \text{ tens } \underline{\quad} \text{ ones}$

$46 = \underline{\quad} \text{ tens } \underline{\quad} \text{ ones}$

$3 = \underline{\quad} \text{ tens } \underline{\quad} \text{ ones}$

$4 \text{ tens} + 3 \text{ ones} = \underline{\quad}$

$0 \text{ tens} + 7 \text{ ones} = \underline{\quad}$

$5 \text{ tens} + 0 \text{ ones} = \underline{\quad}$

I have 5 pets. 2 are DOGS. The rest are CATS. HOW MANY are CATS?

WEEKLY HOMEWORK

Tuesday

READING

Dogs are great pets.
They can be big or small.
They can be fast or slow.
Dogs like to run and play.
They also like to sleep and hang out.
There are also dogs that help people.
Guide dogs can help blind people.
Other dogs help sick people.
Dogs make the best friends.
Do you have a dog?

1. What is the main idea?

- a) Dogs help sick people.
- b) Dogs are great pets.
- c) Dogs are good friends.

2) Which statement is TRUE?

- a) All dogs are fast.
- b) Dogs like to sleep all day.
- c) Some dogs help people.

MATH

$3 + 5 = \underline{\quad} + 3$

$10 = \underline{\quad} + 6$

$2 + \underline{\quad} = 6$

$2 + 8 = 8 + \underline{\quad}$

$7 = 3 + \underline{\quad}$

$9 + \underline{\quad} = 11$

$4 + \underline{\quad} = 5 + 4$

$9 = \underline{\quad} + 4$

$6 + \underline{\quad} = 8$

$6 + 7 = 7 + \underline{\quad}$

$12 = 8 + \underline{\quad}$

$3 + \underline{\quad} = 7$

$9 + 0 = \underline{\quad} + 9$

$6 = \underline{\quad} + 5$

$8 + \underline{\quad} = 12$

$1 + 5 = 5 + \underline{\quad}$

$8 = 4 + \underline{\quad}$

$5 + \underline{\quad} = 10$

WEEKLY HOMEWORK

Wednesday

READING

Correct these sentences:

1. my birthday is june 6 2013

2. we will have a party on friday march 16


3. jack has a dog a cat and a fish

4. when will we go outside

5. sam chet fred and larry are on the team

MATH

Fill in the blanks with the missing numbers:



51		53		55		57		60
61			64		66		68	70
71		73		75		77		80
81			84		86		88	90
91		93		95		97		100

WEEKLY HOMEWORK

Thursday

LANGUAGE ARTS

COLOR THE OPPOSITES GREEN

... AND THE SYNONYMS YELLOW

up - down

nice - sweet

hot - warm

go - stop

big - huge

yes - no

big - little

loud - noisy

fast - quick

hot - cold

WRITE THE OPPOSITE

WRITE THE SYNONYM

under - _____

yummy - _____

MATH

Jack picks up 1 rock on Monday, 3 rocks on Tuesday, and 5 rocks on Wednesday. How many rocks will he pick up on Thursday?

I love to read. I read 2 books the first week of March, 4 books the next week, and 5 books this week. How many books have I read in all?

***REMEMBER TO PRACTICE YOUR SPELLING WORDS & DO YOUR SPELLING HOMEWORK EVERY NIGHT! ALSO, PRACTICE THOSE SIGHT WORDS! ☺**

Name _____

Stepping Out

A. $\begin{array}{r} 9 \\ -3 \\ \hline \end{array}$ $\begin{array}{r} 10 \\ -6 \\ \hline \end{array}$ $\begin{array}{r} 9 \\ -8 \\ \hline \end{array}$ $\begin{array}{r} 11 \\ -4 \\ \hline \end{array}$ $\begin{array}{r} 9 \\ -4 \\ \hline \end{array}$ $\begin{array}{r} 8 \\ -1 \\ \hline \end{array}$

B. $\begin{array}{r} 10 \\ -5 \\ \hline \end{array}$ $\begin{array}{r} 9 \\ -6 \\ \hline \end{array}$ $\begin{array}{r} 10 \\ -2 \\ \hline \end{array}$ $\begin{array}{r} 8 \\ -6 \\ \hline \end{array}$ $\begin{array}{r} 9 \\ -7 \\ \hline \end{array}$ $\begin{array}{r} 9 \\ -5 \\ \hline \end{array}$

C. $\begin{array}{r} 12 \\ -8 \\ \hline \end{array}$ $\begin{array}{r} 10 \\ -4 \\ \hline \end{array}$ $\begin{array}{r} 10 \\ -7 \\ \hline \end{array}$ $\begin{array}{r} 9 \\ -0 \\ \hline \end{array}$ $\begin{array}{r} 12 \\ -7 \\ \hline \end{array}$ $\begin{array}{r} 8 \\ -3 \\ \hline \end{array}$

D. $\begin{array}{r} 8 \\ -4 \\ \hline \end{array}$ $\begin{array}{r} 7 \\ -5 \\ \hline \end{array}$ $\begin{array}{r} 12 \\ -5 \\ \hline \end{array}$ $\begin{array}{r} 11 \\ -2 \\ \hline \end{array}$ $\begin{array}{r} 9 \\ -1 \\ \hline \end{array}$ $\begin{array}{r} 8 \\ -0 \\ \hline \end{array}$

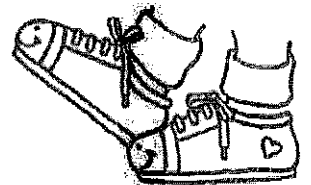
E. $\begin{array}{r} 9 \\ -9 \\ \hline \end{array}$ $\begin{array}{r} 8 \\ -5 \\ \hline \end{array}$ $\begin{array}{r} 9 \\ -2 \\ \hline \end{array}$ $\begin{array}{r} 7 \\ -1 \\ \hline \end{array}$ $\begin{array}{r} 8 \\ -7 \\ \hline \end{array}$ $\begin{array}{r} 11 \\ -5 \\ \hline \end{array}$

F. $10 - 8 = \underline{\quad}$ $8 - 2 = \underline{\quad}$ $7 - 4 = \underline{\quad}$ $10 - 3 = \underline{\quad}$

G. $12 - 4 = \underline{\quad}$ $11 - 7 = \underline{\quad}$ $12 - 3 = \underline{\quad}$ $11 - 9 = \underline{\quad}$

H. $11 - 6 = \underline{\quad}$ $10 - 9 = \underline{\quad}$ $11 - 3 = \underline{\quad}$ $12 - 6 = \underline{\quad}$

I. $12 - 9 = \underline{\quad}$ $11 - 8 = \underline{\quad}$ $10 - 1 = \underline{\quad}$



Name _____

Color Key:**Yellow**

$10 - 5 = \underline{\quad}$

$15 - 7 = \underline{\quad}$

$13 - 5 = \underline{\quad}$

$12 - 7 = \underline{\quad}$

$12 - 4 = \underline{\quad}$

$13 - 8 = \underline{\quad}$

$14 - 9 = \underline{\quad}$

$11 - 6 = \underline{\quad}$

Green

$15 - 9 = \underline{\quad}$

$13 - 4 = \underline{\quad}$

$14 - 5 = \underline{\quad}$

$11 - 5 = \underline{\quad}$

$13 - 7 = \underline{\quad}$

$12 - 3 = \underline{\quad}$

$15 - 6 = \underline{\quad}$

$12 - 6 = \underline{\quad}$

Blue

$14 - 7 = \underline{\quad}$

$15 - 5 = \underline{\quad}$

$11 - 4 = \underline{\quad}$

$14 - 4 = \underline{\quad}$

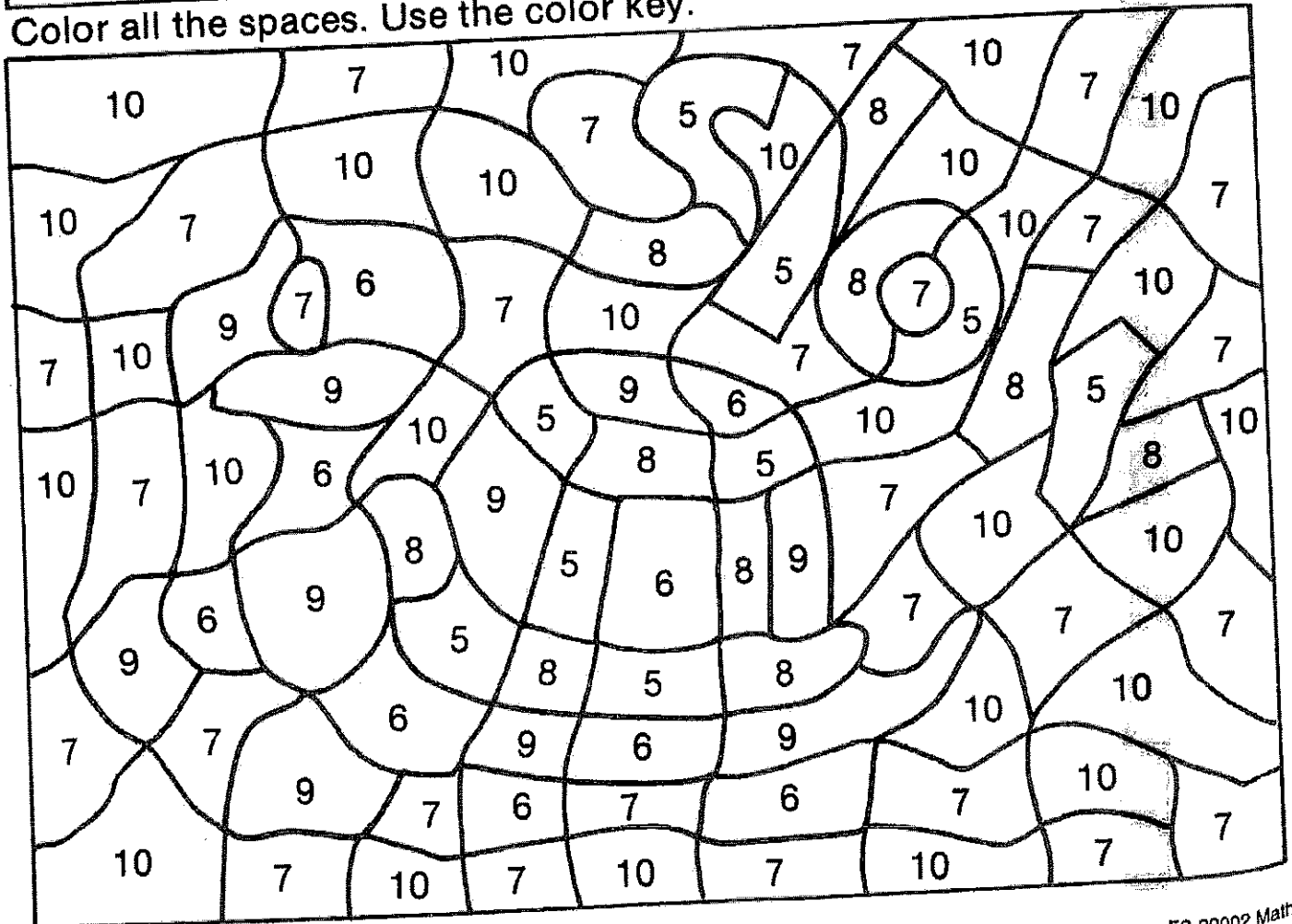
$15 - 8 = \underline{\quad}$

$11 - 1 = \underline{\quad}$

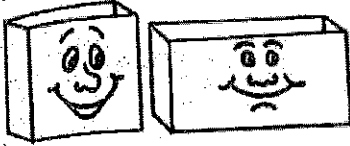
$13 - 3 = \underline{\quad}$

$12 - 5 = \underline{\quad}$


Color all the spaces. Use the color key.



Name _____



Mystery Boxes



Complete each box by subtracting.

A.

Subtract 4	
11	7
9	
8	

B.

Subtract 0	
3	
6	
8	

C.

Subtract 2	
6	
7	
11	

D.

Subtract 7	
9	
12	
10	

E.

Subtract 2	
9	
3	
10	

F.

Subtract 5	
7	
10	
8	

G.

Subtract 4	
5	
10	
4	

H.

Subtract 6	
6	
9	
10	

I.

Subtract 8	
12	
8	
11	

J.

Subtract 1	
5	
4	
2	

K.

Subtract 3	
10	
7	
5	

L.

Subtract 9	
9	
10	
12	

Sign in, Please

Write **plus** or **minus** in each circle to make the number sentence true.

$3 \text{ } \bigoplus \text{ } 8 = 11$

$12 \text{ } \bigcirc \text{ } 6 = 6$

$5 \text{ } \bigcirc \text{ } 6 = 11$

$11 \text{ } \bigcirc \text{ } 9 = 2$

$3 \text{ } \bigcirc \text{ } 8 = 11$

$12 \text{ } \bigcirc \text{ } 7 = 5$

$12 \text{ } \bigcirc \text{ } 9 = 3$

$3 \text{ } \bigcirc \text{ } 9 = 12$


$11 \text{ } \bigcirc \text{ } 8 = 3$

$7 \text{ } \bigcirc \text{ } 5 = 12$

$12 \text{ } \bigcirc \text{ } 8 = 4$

$6 \text{ } \bigcirc \text{ } 5 = 11$

$11 \text{ } \bigcirc \text{ } 7 = 4$



$12 \text{ } \bigcirc \text{ } 4 = 8$

$2 \text{ } \bigcirc \text{ } 9 = 11$

$11 \text{ } \bigcirc \text{ } 3 = 8$

$4 \text{ } \bigcirc \text{ } 7 = 11$

$12 \text{ } \bigcirc \text{ } 3 = 9$

$6 \text{ } \bigcirc \text{ } 6 = 12$

$11 \text{ } \bigcirc \text{ } 5 = 6$

$8 \text{ } \bigcirc \text{ } 4 = 12$




$12 \text{ } \bigcirc \text{ } 5 = 7$

$9 \text{ } \bigcirc \text{ } 3 = 12$

$4 \text{ } \bigcirc \text{ } 8 = 12$

$5 \text{ } \bigcirc \text{ } 7 = 12$


$11 \text{ } \bigcirc \text{ } 4 = 7$



Name: _____

A Ball For My Dog

by Stephenie Hovland



My dog found a ball. It was a yellow ball. My dog loves to chew. He chewed the yellow ball.

My dog found another ball. It was a red ball. My dog loves to play. He played with the red ball.


My dog found another ball. It was a blue ball. My dog loves to run. He ran after the blue ball when I threw it.

I need to find another ball for my dog. What color should it be? What will my dog do with the next ball?

Name: _____

A Ball For My Dog

by Stephenie Hovland



1. How many balls did the dog find?

2. What color was the ball that the dog played with?


3. What did the dog do with the yellow ball?

4. What did the dog do with the blue ball?

Name: _____

A Ball For My Dog

by Stephenie Hovland



What color do you think the next ball will be?

Write a sentence that tells what the dog does with the ball.

Draw a picture of the dog playing with the ball.

Name _____

SPRING BREAK homework

Tic Tac Toe

Directions: To complete your spring break homework please pick at least three activities and use them to form a tic-tac-toe. If you're feeling really smart, you can complete all nine activities. This is due the first day we return to school after break.

<p>#1 Super Story Writing</p> <p>Write a detailed story about your spring break. Make sure your story includes a beginning, middle, and end.</p>	<p>#2 Shape Hunt</p> <p>Look around your house and see how many 2-D and 3-D shapes you can find. Draw a picture of each item and label it with the correct shape name.</p>	<p>#3 Coin Art and Addition</p> <p>Make coin rubbings of four coins on a piece of paper. Label your coins with the names and values. Then add the coins together and write the total value.</p>
<p>#4 Math Challenge</p> <p>Solve this problem and show your work: The garden has 8 rows of flowers. 12 flowers are growing in each row. How many flowers are there in all?</p>	<p>#5 Sight Word Detective</p> <p>Look at a magazine or newspaper and try to find these words: them, then, these, so, some, her, would, him, into, time, has, look, two, more, go, no</p> <p>Circle or highlight the sight words that you find.</p>	<p>#6 Habitat Art</p> <p>Pick one of these habitats: desert, pond, forest, ocean, rainforest</p> <p>Draw a picture of the habitat and include at least 6 animals that live in that habitat.</p>
<p>#7 Spring Draw and Write</p> <p>Draw a picture of you in the spring. What does it look like outside? What will you wear? What activities will you do?</p>	<p>#8 Fact Family Fun</p> <p>Write four corresponding number sentences for each of these number sets:</p> <p>9, 6, 15 5, 25, 30 10, 15, 25 50, 30, 80</p>	<p>#9 Community Leader Research</p> <p>Ask your parents to help you find out the names of your city's mayor, city manager, police chief, and fire chief. Write their names down with a short explanation of what they do to help your city.</p>

Work space for Spring
Tic Tac Toe! 😊

Work space for Spring
Tic Tac Toe! 😊